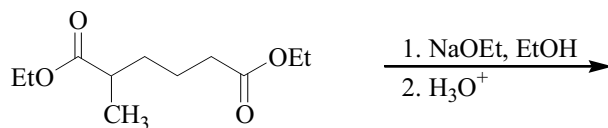
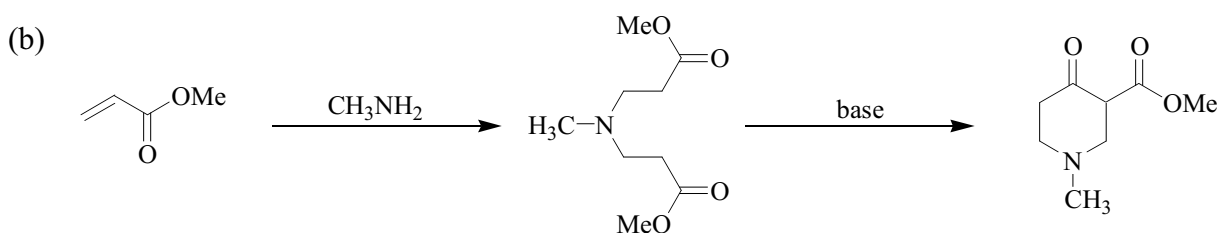
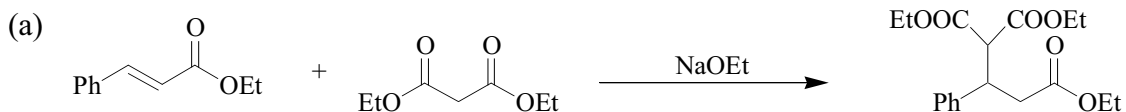


4. Only one Dieckmann product is formed in the following reaction. Which one? Why not the other “possible” product?



5. Suggest mechanisms to account for the formation of products of the following reactions.



Week #13 – Reading and Problems

Chemistry 3231
November 28, 2001

Reading

Chapter 19: 19.10, 19.11, 19.13

Problems

Chapter 19: 21*, 22, 25*, 26*, 28, 38, 42, 56*

* Good problems to do